




1 Maryanne had volleyball practice 4 days a week. She practiced for 3 hours during each practice. During the week, she also practiced at home for 6 more hours. How many hours did she practice volleyball a week?



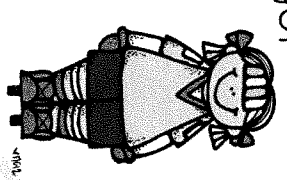
2 There were 6 teams in the basketball playoffs. Each team had 9 players. 4 players were sick and couldn't participate. How many players were in the playoffs?




3 Peter, Shawn and Brad practiced football for a total of 345 minutes between the three of them. If Peter practiced for 118 minutes and Shawn practiced for 124 minutes, how long did Brad practice for?




4 Ava bought 9 tickets to the hockey game. Each ticket cost \$12 dollars. She gave the cashier \$1100. How much change did she get back?




5 Mary was promoting the upcoming volleyball playoffs. She wanted to hang 130 posters around the school. On Monday, she hung 38 posters. On Tuesday, she hung 59 posters. How many more posters does she need to hang?



7 Over the last 3 games, the Eagles football team scored 28 points during each game. On the 4th game, they scored 35 points. How many points did they score over the last 4 games?



6 Bobby needed to order basketball jerseys. There were 11 teams. Each team had 8 players. Bobby decided to also order an extra 6 jerseys in case they had more people join. How many jerseys did he order in all?



8 The coach had a bag of 35 hockey pucks. One of his players brought 12 more pucks. After practice, there were only 42 left. How many did they lose?

